

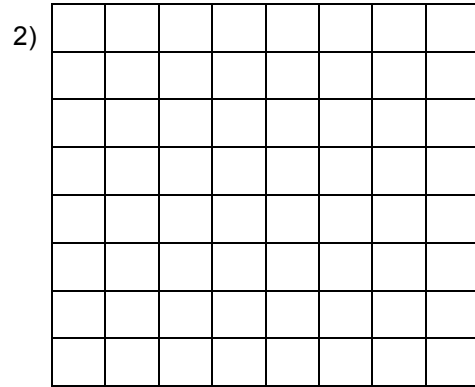
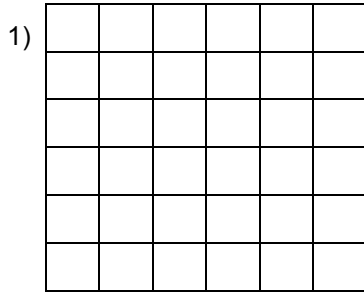


Date      T: multiplication using arrays

For each array write the multiplication.



Draw ONE array in your book for each question to calculate each pair of multiplications.

5)     $6 \times 7$   
       $7 \times 6$

6)     $7 \times 8$   
       $8 \times 7$

7)     $9 \times 6$   
       $6 \times 9$

8)     $8 \times 6$   
       $6 \times 8$

**Date**      **T: multiplication using arrays**

1)  $6 \times 6 = 36$

2)  $8 \times 8 = 64$

3)  $9 \times 9 = 81$

4)  $7 \times 7 = 49$